



Rewarding Learning

General Certificate of Secondary Education
2023

Centre Number

--	--	--	--	--

Candidate Number

--	--	--	--

Biology

Unit 1

Foundation Tier

MV18

[GBL11]

TUESDAY 16 MAY, MORNING

Time

1 hour 15 minutes, plus your additional time allowance.

Instructions to Candidates

Write your Centre Number and Candidate Number in the spaces provided at the top of this page.

You must answer the questions in the spaces provided.

Do not write on blank pages.

Complete in black ink only.

Answer **all ten** questions.

Information for Candidates

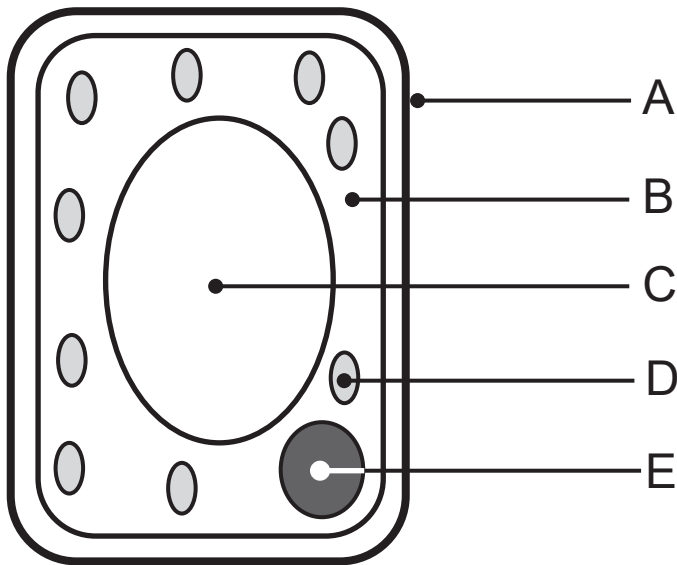
The total mark for this paper is **75**.

Figures in brackets printed at the end of each question indicate the marks awarded to each question or part question.

Quality of written communication will be assessed in

Question **7(b)**.

1 The diagram shows some structures found in a plant cell.



Look at the diagram.

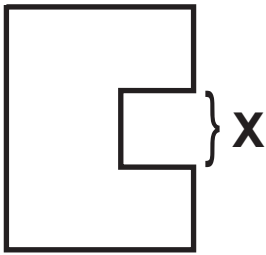
(a) Complete the table to give the name or function of the structures labelled **A** to **E**. [5 marks]

Structure	Name	Function
A		provides support
B	cytoplasm	
C		contains cell sap
D	chloroplast	
E	nucleus	

(b) Give the letters of **two** structures in the diagram which are also found in animal cells. [1 mark]

_____ and _____

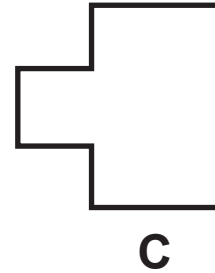
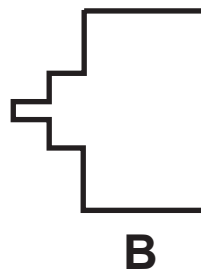
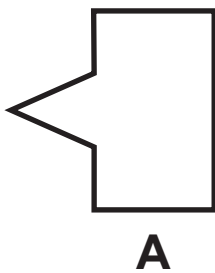
2 (a) The diagram shows an enzyme.



Look at the diagram.

(i) Name the part of the enzyme labelled **X**. [1 mark]

(ii) Which of the following substrates, **A**, **B** or **C**, would this enzyme break down? [1 mark]



Substrate _____

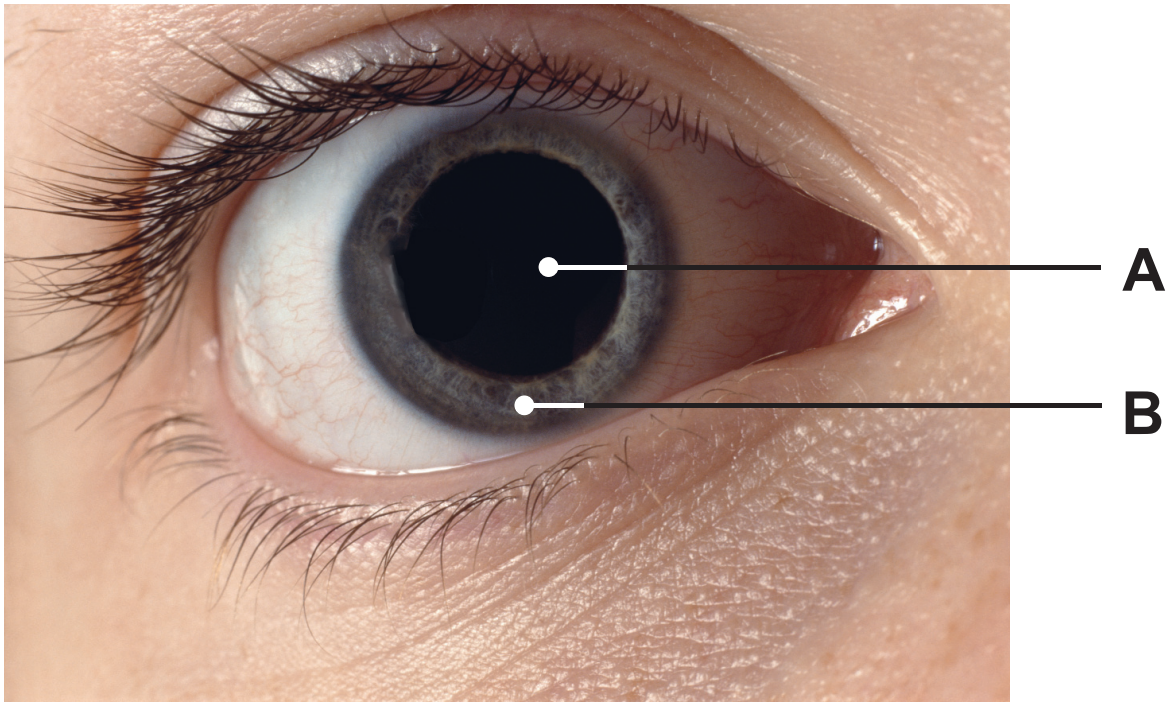
(iii) Name this model of enzyme action. [1 mark]

(b) Name the type of enzyme which breaks down
[2 marks]

protein. _____

fat. _____

- 3 The photograph shows the front of a human eye in dim light.



Look at the photograph.

- (a) Name parts **A** and **B**. [2 marks]

A _____

B _____

- (b) (i) Describe the change to part **A** when a bright light is switched on. [1 mark]

(ii) Suggest why this change is necessary to protect the eye. [2 marks]

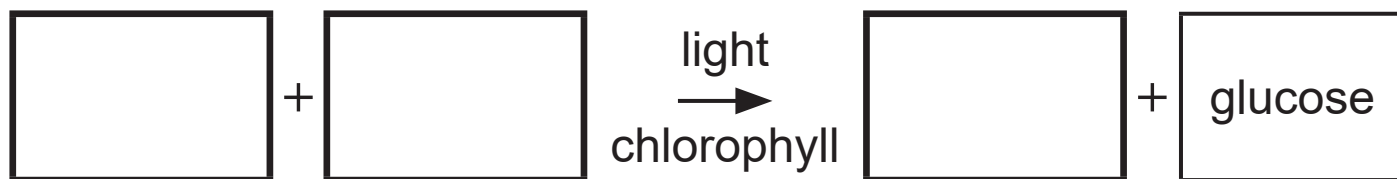
Light entering the eye is refracted (bent) on to the retina.

(c) Name **two** parts of the eye which refract (bend) light. [2 marks]

1. _____

2. _____

- 4 (a) Complete the word equation for photosynthesis.
[3 marks]

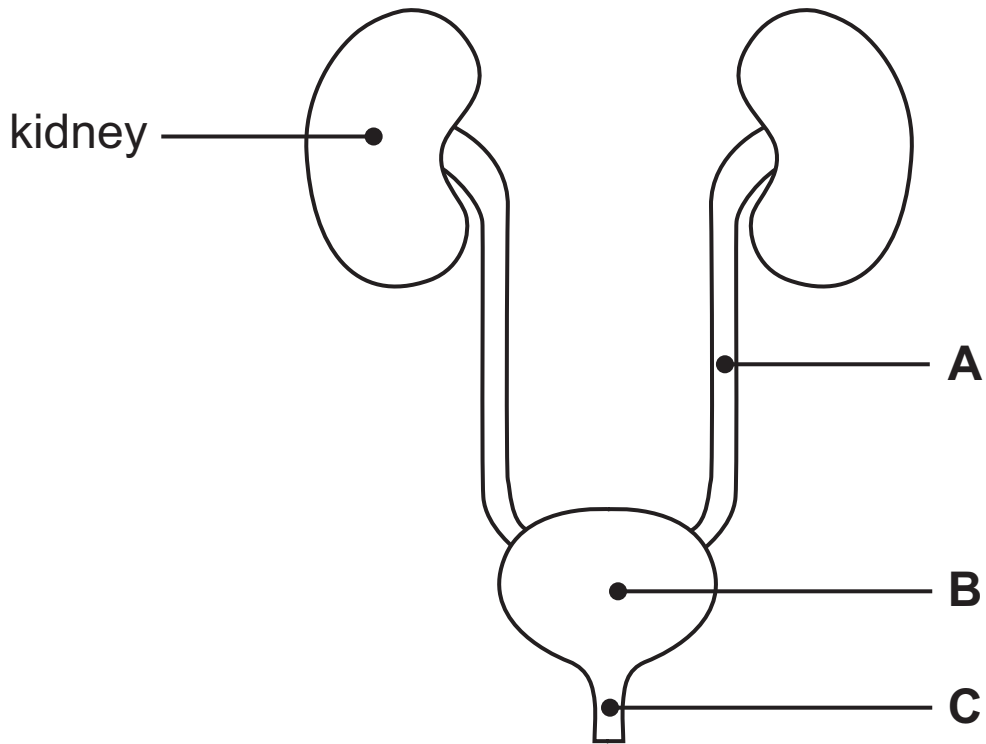


- (b) (i) Name the **complex carbohydrate** used by plants to store glucose. [1 mark]

- (ii) Suggest **one other** way a plant uses the glucose produced during photosynthesis. [1 mark]

- (c) Use the word equation to help you explain why photosynthesis is an **endothermic** process. [1 mark]

5 The diagram shows part of the excretory system.



Look at the diagram.

(a) Name parts **A**, **B** and **C**. [3 marks]

A _____

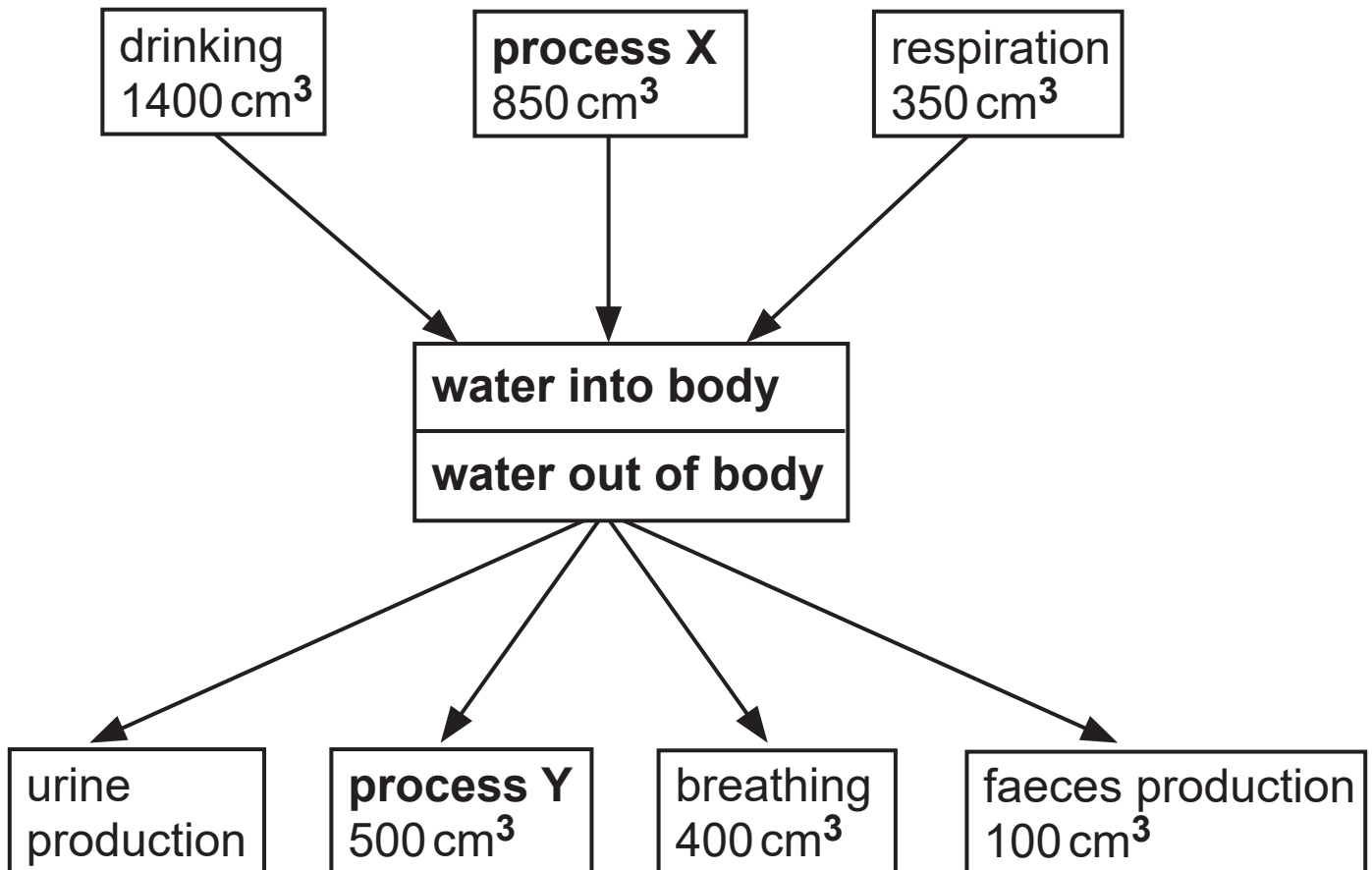
B _____

C _____

Blank Page
(Questions continue overleaf)

(b) The body has to balance the volume of water it takes in with the volume of water it loses.

The diagram shows the volume of water taken in and lost by different processes over 24 hours.



Look at the diagram.

(i) Name processes **X** and **Y**. [2 marks]

X _____

Y _____

- (ii) Calculate the volume of water lost in urine.
[3 marks]

Show your working.

Volume of urine _____ cm³

- (iii) Suggest why the volume of water lost by process Y is lower in winter. [1 mark]

- 6 The photographs show three stages in the life cycle of a sustainable forest.

Stage A



Stage B



Stage C



Look at the photographs.

Stage C shows recently planted trees.

(a) Name the process of planting new trees. [1 mark]

(b) Suggest how spreading out the trees when planting helps them grow better. [2 marks]

(c) Describe how planting more sustainable forests affects the level of oxygen and carbon dioxide in the atmosphere. [2 marks]

oxygen _____

carbon dioxide _____

Many forests have a variety of species of trees planted.

(d) Suggest **two** ways this increases biodiversity. [2 marks]

1. _____

2. _____

7 (a) A hormone is a chemical messenger which is released by a gland and transported to a target organ.

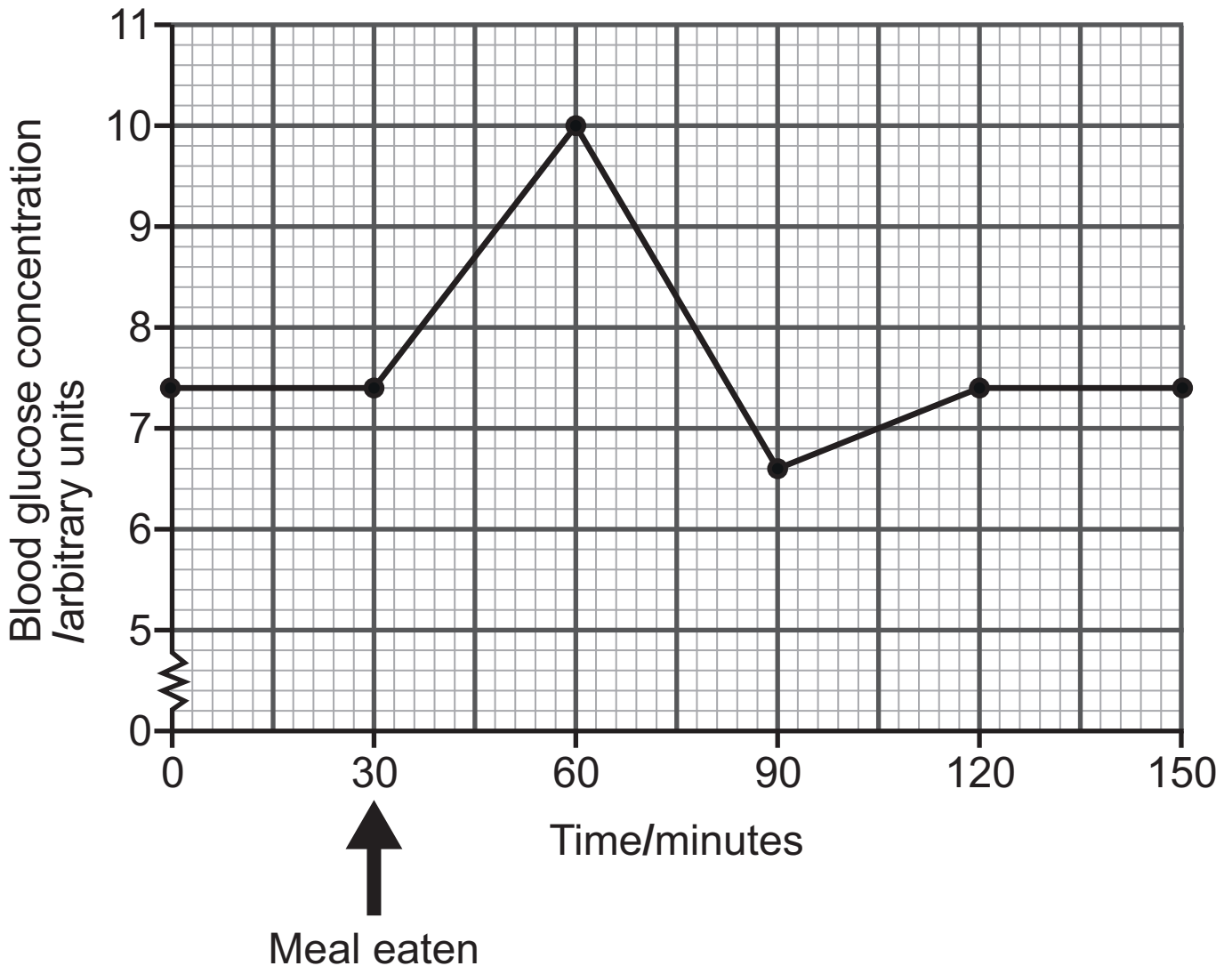
(i) Name the hormone which controls blood glucose concentration. [1 mark]

(ii) Name the gland which produces this hormone. [1 mark]

(iii) Name the target organ for this hormone. [1 mark]

Blank Page
(Questions continue overleaf)

The graph shows the effect of eating a meal on the blood glucose concentration of a healthy student.



Look at the graph.

- (b) • Describe how blood glucose concentration changes during the first 60 minutes **after** eating a meal.

Use **data** from the graph to support your answer.

- Give the time taken for blood glucose concentration to return to normal **after** eating a meal.
- Explain how the hormone returns blood glucose concentration to normal.

Blank Page

- 8 (a) The diagram shows a food chain from a vegetable garden.

lettuce → **snail** → **thrush (bird)**

Look at the diagram.

- (i) Describe the role of the lettuce in this food chain.
[2 marks]

- (ii) Name the secondary consumer in this food chain.
[1 mark]

- (iii) What do the arrows represent in a food chain?
[1 mark]

(b) A group of students investigated this food chain by:

- estimating the population size of each organism.
- calculating the mean biomass of each organism.
- calculating the biomass of the population of each organism.

The table shows their results.

Organism	Population size	Mean biomass of each organism/g	Biomass of population/g
Lettuce	40		6000
Snail	100	16	1600
Thrush	1	100	100

Look at the table.

- (i) Complete the table by calculating the mean biomass of **one** lettuce. [2 marks]

Show your working.

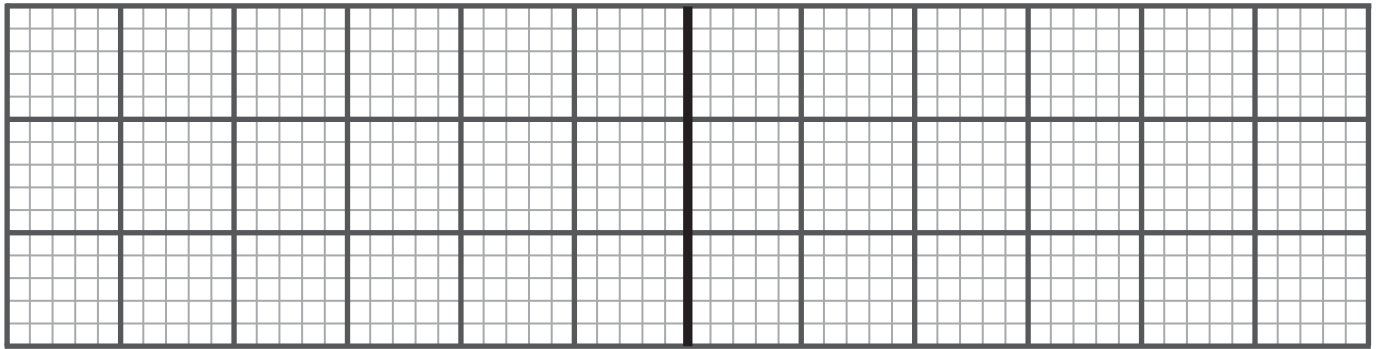
_____ g

(ii) Use the information in the table to draw a pyramid of biomass for this food chain. [3 marks]

Use the scale of 1 small square to represent 100 g.

Use the key shown.

Key: Lettuce  Snails  Thrushes 



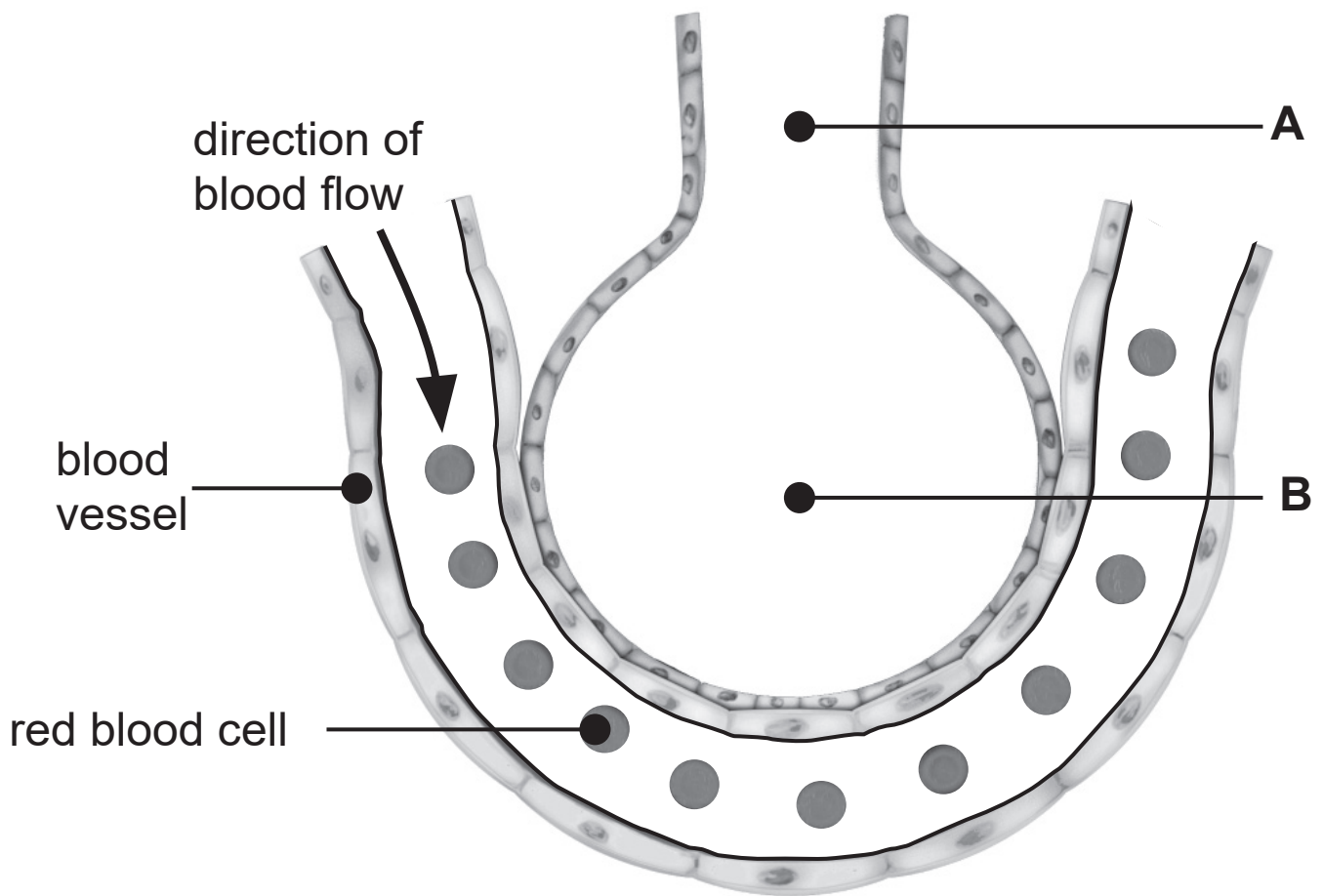
The students concluded the biomass decreased at each trophic level in the food chain because there was a decrease in energy available.

(c) Give **two** reasons why the energy available decreases at each trophic level in **this** food chain. [2 marks]

1. _____

2. _____

9 The diagram shows part of the respiratory system.



(a) Name parts **A** and **B**. [2 marks]

A _____

B _____

(b) On the diagram, draw an arrow to show the movement of oxygen when gas exchange occurs during **breathing in**. [1 mark]

(c) Use the diagram to help describe and explain **two** ways the respiratory system is adapted for gas exchange.
[4 marks]

1. Description _____
Explanation _____

2. Description _____
Explanation _____

10 (a) The photograph shows a Sumatran tiger. It lives in forests on the island of Sumatra in Indonesia.



Table 1 shows the change in the population of Sumatran tigers on the island over a period of 40 years.

Table 1

Year	Number of Sumatran tigers
1980	1000
1990	850
2000	750
2010	625
2020	495

(i) What is meant by the term ‘population’? [1 mark]

Look at **Table 1**.

- (ii) Calculate the percentage decrease in the number of Sumatran tigers from **1990** to **2010**. [3 marks]

Show your working.

_____ %

(b) **Table 2** shows the area of forest on the island of Sumatra between 1990 and 2010.

Table 2

Year	Area of forest/million hectares
1990	21
2000	16
2010	13

(i) Use evidence from **Table 1** and **Table 2** to suggest and explain what may have caused the change in the population of Sumatran tigers. [2 marks]

(ii) Suggest **one other** cause of this change in the population of Sumatran tigers. [1 mark]

(iii) Suggest **one** government initiative which could be introduced to protect the population of Sumatran tigers. [1 mark]

This is the end of the question paper

SOURCES

Q1 Source: © *Principal Examiner*

Q2(a) . . Source: © *Principal Examiner*

Q3 Source: © *Adam Hart-Davis / Science Photo Library*

Q5 Source: © © *Getty Images*

Q6 Source: © *Principal Examiner*

Q9 Source: © *Getty Images*

Q10(a) . . Source: © *Getty Images*

Q10(a) . . Source: © *Adapted from © Project Ark Foundation*

Q10(b) . . Source: ""*Mapping and monitoring deforestation and forest degradation in Sumatra (Indonesia) using Landsat time series data sets from 1990 to 2010*" © *Belinda Arunarwati Margono et al 2012. Environ. Res. Lett. 7 034010 DOI 10.1088/1748-9326/7/3/034010 Published 19 July 2012*"

For Examiner's use only	
Question Number	Marks
1	
2	
3	
4	
5	
6	
7	
8	
9	
10	
Total Marks	
Examiner Number	

Permission to reproduce all copyright material has been applied for. In some cases, efforts to contact copyright holders may have been unsuccessful and CCEA will be happy to rectify any omissions of acknowledgement in future if notified.